
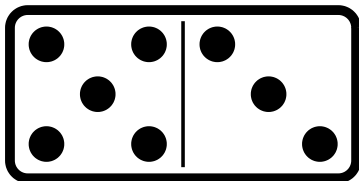




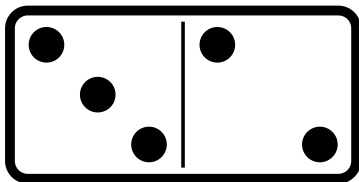
Policz ile jest łącznie kropek na jednym klocku Domina? Zapisz wynik dodawania



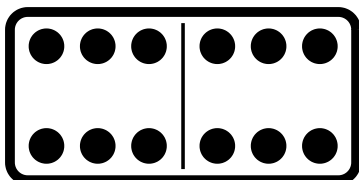
$$4 + 5 = \square$$



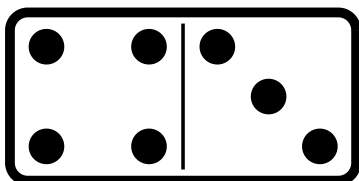
$$5 + 3 = \square$$




$$3 + 2 = \square$$





$$6 + 6 = \square$$



$$4 + 3 = \square$$



$$6 + 5 = \square$$



Połącz po kropkach i pokoloruj.

